








NAME: \_\_\_\_\_


WORKSHEET 4.1

*"Handin' It On"*

**CALCULATOR MATH ACTIVITY:** Calculate how much economic activity and how many jobs are generated by the number of cows in each line. (*Hint: Every nine cows equals one job, and each cow generates about \$13,700 in economic activity*)

<u>Number of Cows</u>	<u>Number of Jobs</u>	<u>Economic Activity</u>
 9 COWS		
 18 COWS		
 90 COWS		
 450 COWS		
 900 COWS		

1. What is a resource? \_\_\_\_\_  
\_\_\_\_\_
2. List three natural resources:  
\_\_\_\_\_
3. List three things a dairy farmer supplies to the local community:  
\_\_\_\_\_





## WORKSHEET 4.2

### "Handin' It On"

Use the T-Chart to put the resources listed below into the appropriate categories:

- ◆ Air
- ◆ Clothing
- ◆ Food
- ◆ Jobs
- ◆ Money
- ◆ Plants
- ◆ Rain
- ◆ Soil
- ◆ Sunlight
- ◆ Taxes

<u>NATURAL RESOURCE</u>	<u>CAPITAL RESOURCE</u>

**Additional Activity:** Refer to the additional classroom activity in the lesson or to the interactive game associated with this lesson found on [www.discoverdairy.com](http://www.discoverdairy.com). Complete the activity and chart how much money moves through each person's hands during the exercise.

PEOPLE	Consumer				
	Farmer				
	Processor				
	Store Owner				
	Service Provider				
	Supplier				
	Employee				
	Tax Collector				
		\$0	\$5	\$10	\$15

MONEY EXCHANGED

